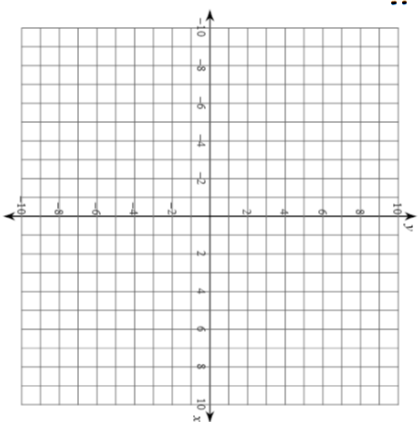
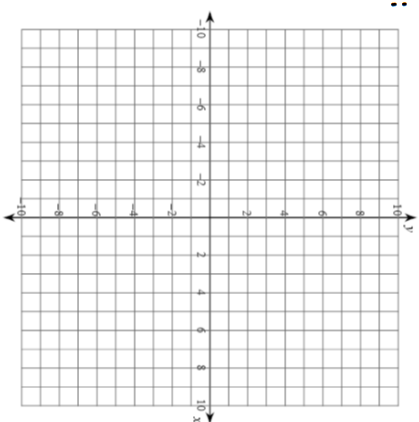


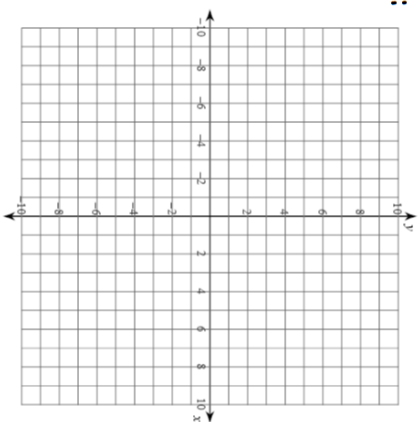
Find the distance between:
 $(-6, -1)$ and $(-3, -8)$



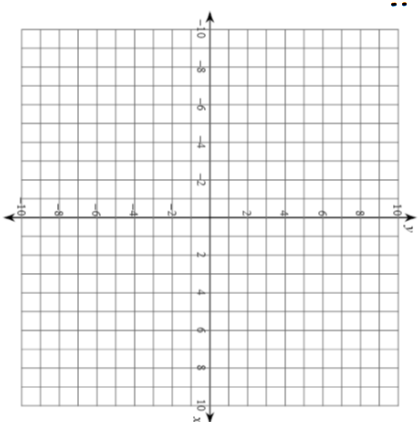
Find the distance between:
 $(-8, -3)$ and $(-8, 7)$



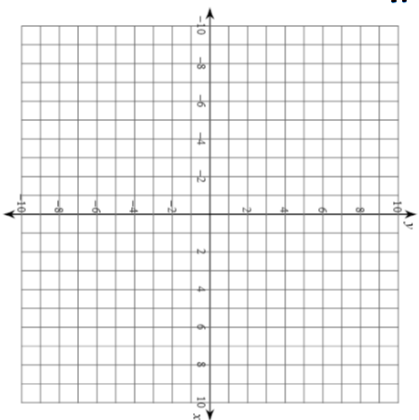
Find the distance between:
 $(-7, 7)$ and $(-1, -5)$



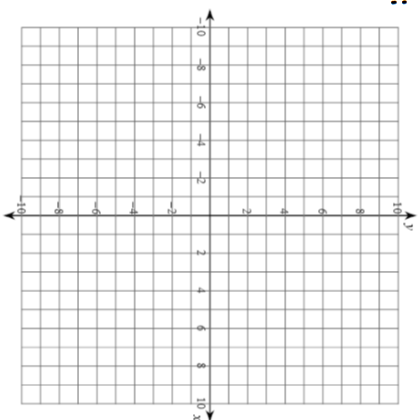
Find the distance between:
 $(0, -2)$ and $(6, 0)$



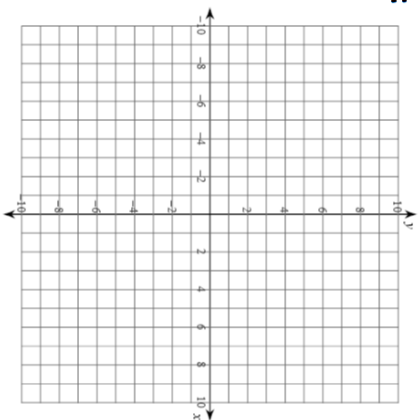
Find the distance between:
 $(3, -8)$ and $(6, 4)$



Find the distance between:
 $(4, -21)$ and $(-3, 0)$



Find the distance between:
 $(-3, -6)$ and $(0, 6)$



Find the distance between:
 $(-4, 8)$ and $(5, 7)$

