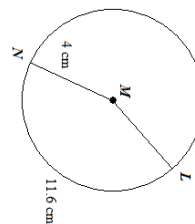
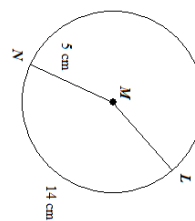


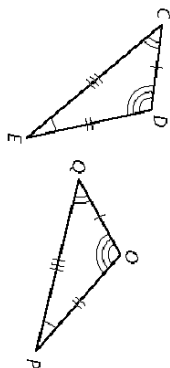
Find $m\angle LMN$.



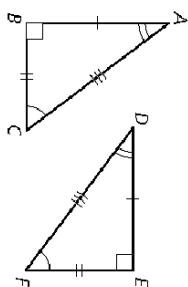
Find $m\angle LMN$.



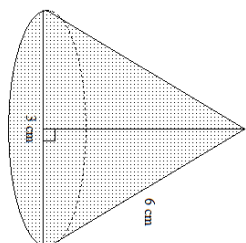
Write a congruence statement for the triangles.



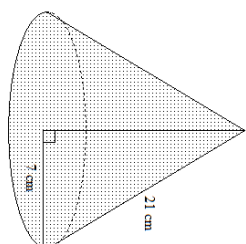
Write a congruence statement for the triangles.



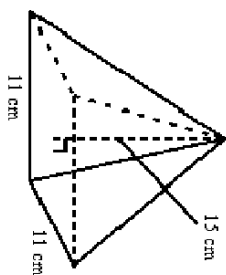
Find the surface area of the cone.



Find the surface area of the cone.



Find the volume of the square pyramid to the nearest tenth.



Not drawn to scale

A snowball has a diameter of 5 centimeters. What is the volume?

