

# Identify angle pairs

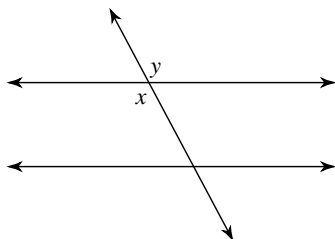
© 2015 Kuta Software LLC. All rights reserved.

Name \_\_\_\_\_

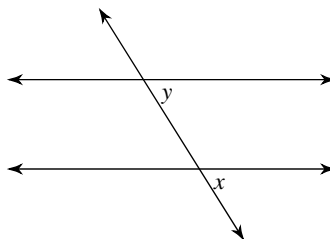
Date \_\_\_\_\_

Identify each pair of angles as corresponding, alternate interior, alternate exterior, consecutive interior, vertical, or adjacent.

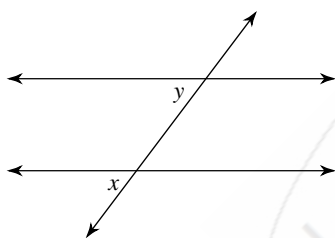
1)



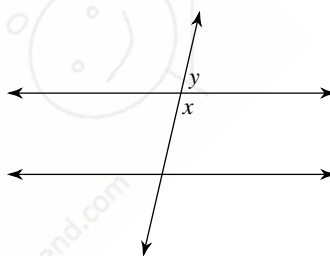
2)



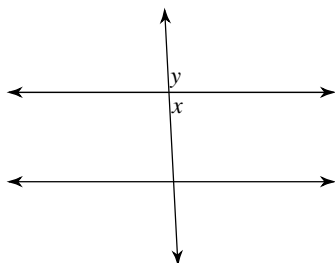
3)



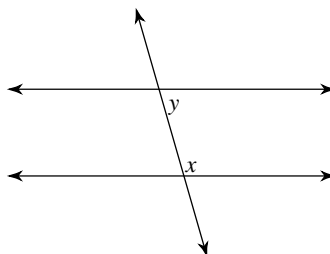
4)



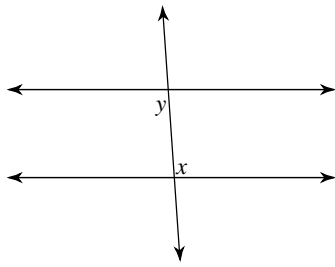
5)



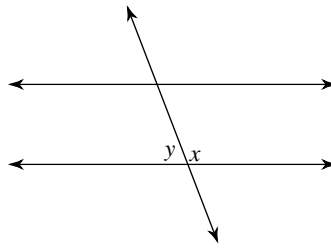
6)



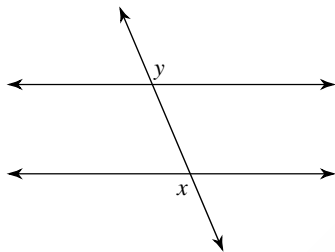
7)



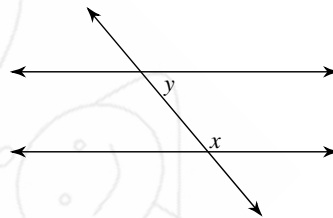
8)



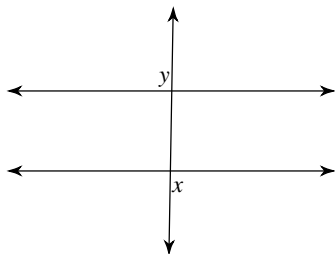
9)



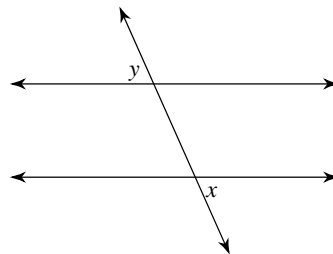
10)



11)



12)



## Answers to

- |                        |                          |                        |             |
|------------------------|--------------------------|------------------------|-------------|
| 1) vertical            | 2) corresponding         | 3) corresponding       | 4) adjacent |
| 5) adjacent            | 6) consecutive interior  | 7) alternate interior  | 8) adjacent |
| 9) alternate exterior  | 10) consecutive interior | 11) alternate exterior |             |
| 12) alternate exterior |                          |                        |             |

