



**Withdrawals****Multiple Choice**

Identify the choice that best completes the statement or answers the question.

- \_\_\_\_\_ 1. Dale is withdrawing \$503.12 from his savings account on July 7, 2021. His account number is 1859933. Provided that the written amount is legible, which of the following withdrawal slips is correctly filled out?

Date: 6-7-2021	Acct # 1859933
	\$503.12
Savings Withdrawal Slip 1	Signed: _____

Date: 7-7-2021	Acct # 1859933
	\$503.12
Savings Withdrawal Slip 2	Signed: _____


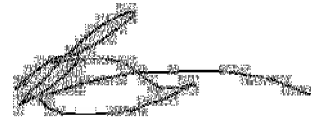
a. Slip 1

b. Slip 2

Name: \_\_\_\_\_

ID: A

- \_\_\_\_ 2. Mark is withdrawing \$622.38 from his savings account on March 27, 2016. His account number is 6148472. Provided that the written amount is legible, which of the following withdrawal slips is correctly filled out?

Date: 3-27-2016	Acct # 6148472
	\$622.38
Savings Withdrawal Slip 1	
Signed: _____	

Date: 3-27-2016	Acct # 6148472
	\$621.38
Savings Withdrawal Slip 2	
Signed: _____	


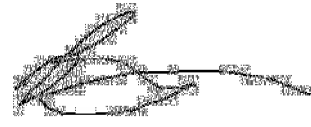
a. Slip 1

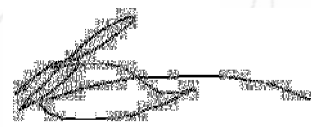
b. Slip 2

Name: \_\_\_\_\_

ID: A

- \_\_\_ 3. Mark is withdrawing \$196.72 from his savings account on December 26, 2022. His account number is 5232644. Provided that the written amount is legible, which of the following withdrawal slips is correctly filled out?

Date: 12-26-2022	Acct # 5232644
	\$197.72
Savings Withdrawal Slip 1	
Signed: _____	

Date: 12-26-2022	Acct # 5232644
	\$196.72
Savings Withdrawal Slip 2	
Signed: _____	


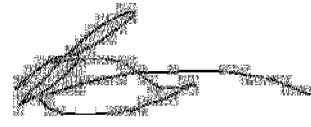
a. Slip 1

b. Slip 2

Name: \_\_\_\_\_

ID: A

- \_\_\_\_ 4. Jacob is withdrawing \$640.70 from his savings account on March 4, 2024. His account number is 4398409. Provided that the written amount is legible, which of the following withdrawal slips is correctly filled out?

Date: 3-4-2024	Acct # 4398409
	\$640.70
Savings Withdrawal Slip 1	
Signed: _____	

Date: 3-4-2024	Acct # 4397409
	\$640.70
Savings Withdrawal Slip 2	
Signed: _____	


a. Slip 2

b. Slip 1

Name: \_\_\_\_\_

ID: A

- \_\_\_ 5. Dale is withdrawing \$667.07 from his savings account on February 9, 2014. His account number is 7495492. Provided that the written amount is legible, which of the following withdrawal slips is correctly filled out?

Date: 2-9-2014	Acct # 7495492
	\$667.07
Savings Withdrawal Slip 1	Signed: _____

Date: 2-9-2014	Acct # 7496492
	\$667.07
Savings Withdrawal Slip 2	Signed: _____


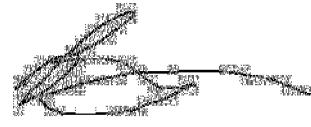
a. Slip 2

b. Slip 1

Name: \_\_\_\_\_

ID: A

- \_\_\_ 6. Jacob is withdrawing \$355.01 from his savings account on January 2, 2030. His account number is 8896343. Provided that the written amount is legible, which of the following withdrawal slips is correctly filled out?

Date: 1-2-2030	Acct # 8895343
	\$355.01
	
Savings Withdrawal Slip 1	Signed: _____

Date: 1-2-2030	Acct # 8896343
	\$355.01
	
Savings Withdrawal Slip 2	Signed: _____


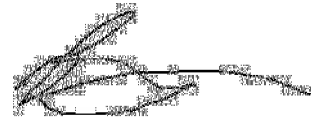
a. Slip 2


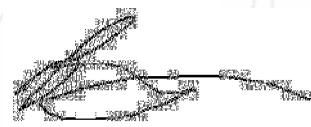
b. Slip 1

Name: \_\_\_\_\_

ID: A

- \_\_\_ 7. Lacy is withdrawing \$97.35 from her savings account on May 3, 2027. Her account number is 7752221. Provided that the written amount is legible, which of the following withdrawal slips is correctly filled out?

Date: 5-3-2027	Acct # 7752221
	\$97.35
Savings Withdrawal Slip 1	
Signed: _____	

Date: 5-3-2027	Acct # 7753221
	\$97.35
Savings Withdrawal Slip 2	
Signed: _____	


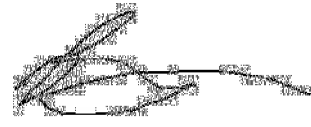
a. Slip 2

b. Slip 1

Name: \_\_\_\_\_

ID: A

8. Dale is withdrawing \$314.10 from his savings account on January 24, 2024. His account number is 1376270. Provided that the written amount is legible, which of the following withdrawal slips is correctly filled out?

Date: 1-24-2024	Acct # 1376270
	\$314.10
Savings Withdrawal Slip 1	
Signed: _____	

Date: 1-24-2024	Acct # 1375270
	\$314.10
Savings Withdrawal Slip 2	
Signed: _____	

a. Slip 1

b. Slip 2



**Withdrawals  
Answer Section**

**MULTIPLE CHOICE**

- |           |        |
|-----------|--------|
| 1. ANS: B | PTS: 1 |
| 2. ANS: A | PTS: 1 |
| 3. ANS: B | PTS: 1 |
| 4. ANS: B | PTS: 1 |
| 5. ANS: B | PTS: 1 |
| 6. ANS: A | PTS: 1 |
| 7. ANS: B | PTS: 1 |
| 8. ANS: A | PTS: 1 |

